

# St. Andrews Scots School

Adjacent Navniti Apartments I.P Extension Patparganj, Delhi-110092

Session – 2024- 2025

## Class IV:- SUMMER HOLIDAY HOMEWORK



## ENGLISH:-

All work is to be done in thin notebook.

Do your work neatly.

1. Read Panchatantra stories.

2. Always speak in English.

3. Consume balanced diet.

4. Help your Parents and Grandparents in their household work.

5. Do 10-15 pages handwriting in a thin notebook.

6. Make a 'Thanks Giving Card' for your father on Father's Day by expressing your love and gratitude towards him.

7. Do Comprehension 3 and 4 (page no. 89, 90) in your Grammar book only.

8. Observe the given picture and write 7-8 lines on it



9. Complete all your pending work.

10. Revise all the work done in class.

11. Identify the different types of sentences as interrogative, imperative, exclamatory or statements.

a) Walking is a good exercise. \_\_\_\_\_.

b) Who answered the doorbell? \_\_\_\_\_.

c) Please speak softly. \_\_\_\_\_.

d) What a pretty dress! \_\_\_\_\_.

e) The clock has stopped working. \_\_\_\_\_.

f) Is Sam your closest friend? \_\_\_\_\_.

12. Rewrite the following group of words as sentences.

a) I to the forgot letter post. \_\_\_\_\_.

b) at the aim the deer took hunter. \_\_\_\_\_.

c) I dog enjoy with playing my. \_\_\_\_\_.

d) a should have called you him liar not. \_\_\_\_\_.

e) can I the see on roof something. \_\_\_\_\_.

f) brought he a lunch pizza for. \_\_\_\_\_.

13. Write a paragraph in your thin notebook.

a) How I spent my Summer holidays.

OR

b) If I were a Millionaire....!

## Mathematics :-

- Complete the work of Unit -1 , 2 & 3 in Maths notebook.
- Do practice of Unit-1 & 2 in practice notebook.
- Learn the tables properly from 2 to 20 .

### Activity

Show the concept of Multiplication by Lattice method on A4 size sheet. (Refer pg no : 69 of your book)

### HOTS Question

Write the smallest and greatest numbers using each of the numerals I, X and L. (You may repeat the symbols)

Solve the following questions in your Maths notebook.

Q1 Choose the correct option:-

1 Multiplicand X \_\_\_\_\_ = Product

- a) Addend b) Sum c) Multiplier d) Quotient

2. Renu has 900 currency notes of 50 rupee each . She has \_\_\_\_\_ money.

- a) ₹ 4,500 b) ₹ 45,000 c) ₹ 450 d) none of these

3. Smallest 6 digit number – 1

- a) 1,00,000 b) 9,999 c) 99,999 d) 9,99,999

Q2. Find the number which is 300 less than 10387.

Q3. Add the following :-

- a) 24753 , 15632 and 23524

Q4. Do as directed :-

a)  $1084 \times 40 = \underline{\hspace{2cm}}$

b)  $2363 \times 800 = \underline{\hspace{2cm}}$

c)  $2500 \div 100 = \underline{\hspace{2cm}}$

d)  $2378 \div \underline{\hspace{2cm}} = 2378$

Q5. Divide and find the quotient and remainder.

$$90350 \div 11$$

## Science :-

1. Collect information about food preservation and different methods of it. Paste pictures of different methods of food preservation and write briefly about them in your scrapbook.
2. Make a collage of pictures of variety of food that comes under balanced diet and write benefits of eating balanced diet in your scrapbook.
3. Make a poster on Harmful and Useful Microbes on A4 size sheet.
4. Make different types of teeth using modelling clay and paste them in your scrapbook.
5. Complete and learn all the work of L-1,2 and 3 done in the class and practice all the diagrams. Take out the printout of the worksheet. Paste and do worksheet in your Science notebook.

## SCIENCE WORKSHEET :-

### Q1) Fill in the blanks

- a. \_\_\_\_\_ are the smallest microbes.
- b. Bile juice is secreted by \_\_\_\_\_.
- c. Disease-causing microbes are called \_\_\_\_\_.

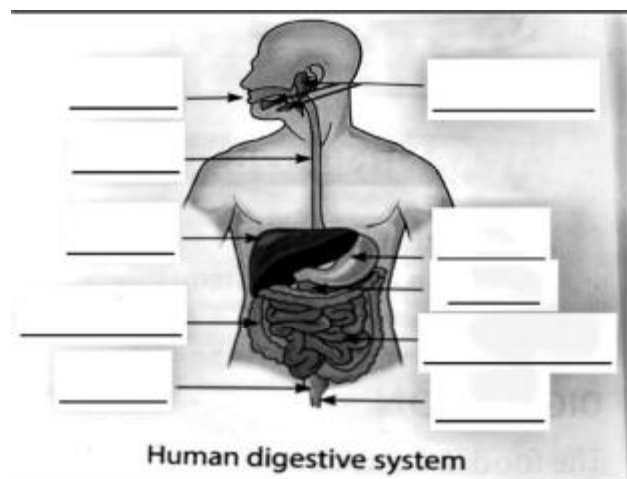
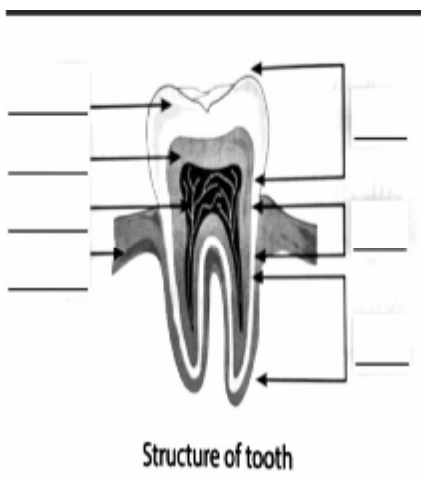
### Q2). True or False

- a. Crown, neck and root are the three parts of a tooth. \_\_\_\_\_
- b. The undigested food passes in the small intestine. \_\_\_\_\_
- c. At the age of four, a child has 32 teeth. \_\_\_\_\_

### Q3) Name them

- a. A teeth help to tear food. \_\_\_\_\_
- b. Two protective food items. \_\_\_\_\_
- c. We can see microbes through it. \_\_\_\_\_

### Q4). Label the following diagrams.



## Social Science:-

- \*Do the holiday homework in a scrap book.\*
- \*Writing\*
- a. Make a list of any five steps you can take for the betterment of your town or city.
- b. Make a list of fundamental rights provided by our Constitution.
- c. Make a collage of national symbols, write two sentences about each.

### \*Map Work\*

Practice map work done in L-1.

### \*Activity\*

1. Visit any one monument, click and paste pictures in scrap book and write few lines about it.
2. Spend time with your grandparents.
3. Learn the national anthem properly and sing it with proper intonation in 52 seconds.
4. Keep your surroundings clean.
5. Plant a sapling and take care of it daily.

### \*Learning\*

Learn all the work done in the class.

## SOCIAL STUDIES WORKSHEET :-

1 Define the following terms

i.certificate

ii law

2 Fill in the blanks

i.People who were born and live in a country is known as \_\_\_\_\_.

ii.Local self-governing bodies collect money through \_\_\_\_\_.

3 State True or False I India is a democratic country. li A new Municipal Committee is elected every year.

4 Answer in one word I Issues birth certificate – ii Name the country which has the longest written constitution –

COMPUTER :-

1. Answer in one word:-

A. Symbols with names that represent programs, folders or files.- \_\_\_\_\_

B. Long horizontal bar located at the bottom of the desktop - \_\_\_\_\_


C. It displays latest information called. \_\_\_\_\_

D. Where does a deleted file go? \_\_\_\_\_

Answer the following question :-

**Q2. What is Folder? Make its icon also.**

FOLDER



\_\_\_\_\_

\_\_\_\_\_

\_\_\_\_\_.

**Q3. What is Pen drive? Make its icon also.**

PEN DRIVE



\_\_\_\_\_

\_\_\_\_\_

\_\_\_\_\_.

Draw the icons of the following. :-

**Q4. Document file**



**Q5. Excel file**



## HINDI :-

- १-बढ़ती हुई गर्मी के कारण भूखे - प्यासे पशु- पक्षियों की सहायता आप किस प्रकार करेंगे? बताइए।
  - २- आपको गर्मी, सर्दी या बरसात कौन सा मौसम पसंद है। उस मौसम के विषय में 5 से 10 पंक्तियाँ लिखिए।
  - ३-अपने अपने घर के आसपास या घर में आसानी से पाए जाने वाले पौधों के नाम लिखिए तथा उनसे होने वाले लाभों के विषय में भी बताइए।
  - ४-अखबार या पत्रिका से १० नए शब्द खोज कर उनके विलोम शब्द लिखिए।
  - ५-अब तक कराए गए पाठों का अभ्यास कीजिए व प्रतिदिन अपने पाठ्यपुस्तक का एक पृष्ठ पढ़िए।
  - ६ प्रश्न संख्या 1 से 4 तक सभी कार्य A4 साइज शीट पर करिए।
- \*कार्यपत्रिका का प्रिंटआउट निकालकर उसे पूरा कर कर अपनी हिंदी कार्य पुस्तिका में लगाइए।

## कार्यपत्रिका

रिक्त स्थान भरिए।

1. भाषा के दो रूप, \_\_\_\_\_ भाषा व \_\_\_\_\_ भाषा हैं।
2. केरल में \_\_\_\_\_ भाषा बोली जाती है।
3. \_\_\_\_\_ को हम हिंदी दिवस के रूप में मनाते हैं।
4. अंग्रेजी भाषा की लिपि \_\_\_\_\_ है।
5. \_\_\_\_\_ के द्वारा हम भाषा को शुद्ध रूप में बोलना, पढ़ना, लिखना सीखते हैं।
6. अखबार में भाषा का \_\_\_\_\_ होता है।

निम्नलिखित वाक्यों में संज्ञा रेखांकित करके भेद बताइए।

1. ताजमहल सफ़ेद संगमरमर से बना है।
2. कार्तिक क्रिकेट खेल रहा है।



3.पेड़-पौधों से हरियाली छा जाती है ।

4.बालिकाएँ पढ़ रही हैं ।